
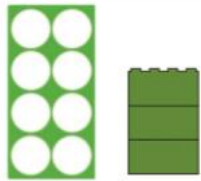









COUNTING

				
How many? 5	How many? 11	How many? 6	How many? 12	How many? 9

CALCULATING

<p>First,</p>  <p>there are 10 bananas.</p>	<p>Then,</p>  <p>Hungry Monkey eats 5.</p>	<p>Now,</p> <p>5</p> <p>how many are left?</p>
<p>First,</p>  <p>there are 8 bananas.</p>	<p>Then,</p>  <p>Hungry Monkey eats 3.</p>	<p>Now,</p> <p>5</p> <p>how many are left?</p>

MEASURE

Which caterpillar is the shortest?
Which caterpillar is the longest?
How do you know this?

