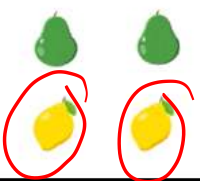




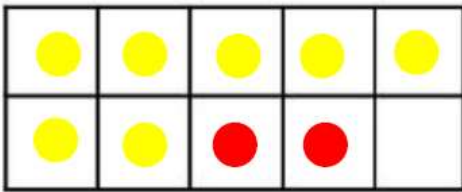


COUNTING

				
How many lemons? 2	How many oranges? 1	How many pigs? 5	How many bananas? 5	How many footballs? 3

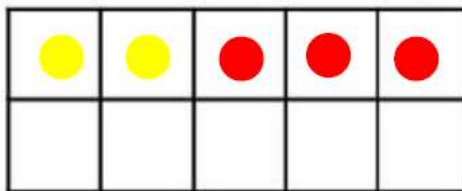
CALCULATING

Use the tens frame to help you find the answers.



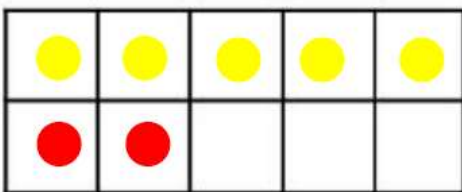
$$7 + 2 =$$

$$= \boxed{9}$$



$$2 + \boxed{3} =$$

$$= \boxed{5}$$



$$5 + 2 =$$

$$= \boxed{7}$$

Halves

Can you find the half?



Half of 10 is

$$\boxed{5}$$



Half of 8 is

$$\boxed{4}$$



Half of 6 is

$$\boxed{3}$$