






COUNTING

				
How many are green?	How many are yellow?	How many are red?	How many are blue?	How many altogether?

CALCULATING

$6 - \text{6 yellow dots} = \square$

$\text{6 blue dots} - 3 = \square$

$\text{6 red dots} + 2 = \square$

$\text{6 yellow dots} + \text{6 blue dots} = \square$



3D Shapes

Can you name the shapes below?



Can you talk about some of the characteristics of these shapes to your adults?