









COUNTING

				
How many? 8	How many? 6	How many? 3	How many? 14	How many? 12

CALCULATING

Add together to work out the total.

	=	<input type="text" value="12"/>	$6 + 4 =$	<input type="text" value="10"/>
	=	<input type="text" value="13"/>	$3 + 7 =$	<input type="text" value="10"/>
	=	<input type="text" value="8"/>	$2 + 8 =$	<input type="text" value="10"/>

FINDING HALF

Can you draw a line through these items to make them into two halves?



You could put the line in any place as long as the two halves are the same.