



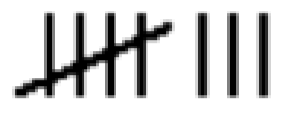


COUNTING

				
How many?	How many?	How many?	How many?	How many?

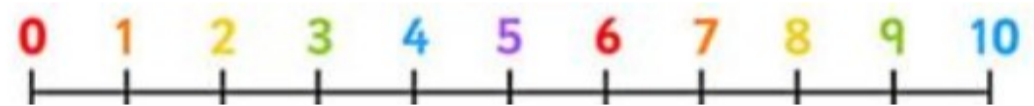
CALCULATING

Use the number line to find the answer.

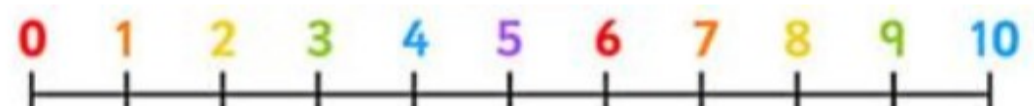
$$7 - 6 = \square$$



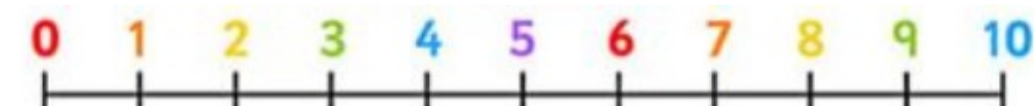
$$\begin{array}{|c|} \hline \bullet \\ \hline \bullet \\ \hline \bullet \\ \hline \bullet \\ \hline \bullet \\ \hline \end{array} + 4 = \square$$



$$\begin{array}{|c|} \hline \bullet \\ \hline \bullet \\ \hline \bullet \\ \hline \end{array} - 2 = \square$$



$$6 + \begin{array}{|c|} \hline \bullet \\ \hline \bullet \\ \hline \end{array} = \square$$

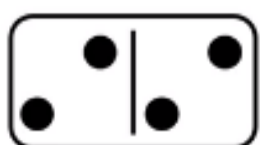


DOUBLES

Can you find the doubles?

Double 2 is

$$\square + \square = \square$$



Double 3 is

$$\square + \square = \square$$

