




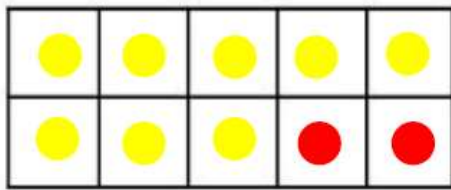


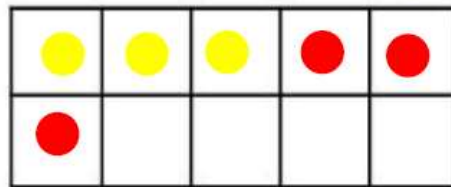
COUNTING				
				
How many snowmen?	How many houses?	How many snowflakes?	How many igloos?	How many altogether?
2	2	4	2	10

CALCULATING

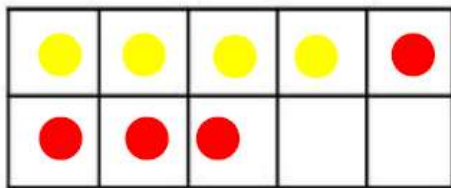
Use the tens frame to help you find the answers.



$$8 + 2 = 10$$



$$3 + 3 = 6$$



$$4 + 4 = 8$$

NUMBER FORMATION

Trace over the numeral, make sure you start in the correct place! Can you recognise and name each numeral as you trace them? Have a go on your own too!

0 1 2 3 4 5 6 7 8 9 10

11 12 13 14 15 16 17 18 19 20