

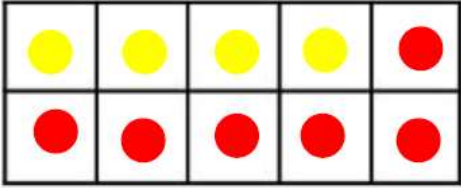
COUNTING

How many?	How many?	How many?	How many?	How many rainbows?
7	14	9	2	2

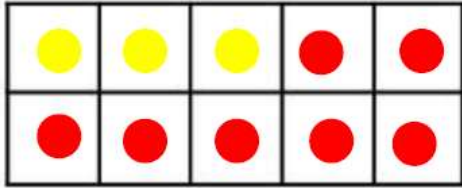
CALCULATING

Use the tens frames to help you find number bonds to 10. Can you think of another way of making 10 in the empty tens frame?

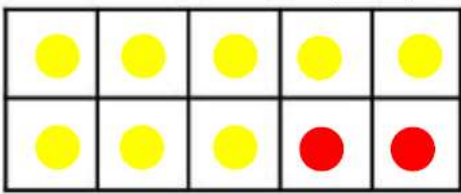
$4 + 6 = 10$



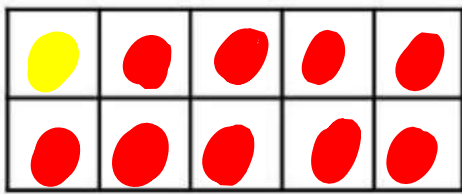
$3 + 7 = 10$



$8 + 2 = 10$



$1 + 9 = 10$



Accept other options

ONE MORE THAN...

Can you find one more than these numbers?

One more than 6 is 7

One more than 10 is 11

One more than 9 is 10

One more than 17 is 18