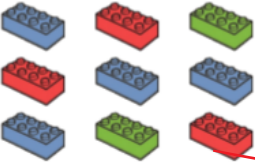






COUNTING - MATCH THE NUMBER

				
11	10	8	9	7

CALCULATING

Use the Numicon to work out the missing number in each question.

$$\text{2} + \boxed{3} = \text{5}$$

$$\text{6} + \boxed{3} = \text{9}$$

$$\text{5} + \boxed{3} = \text{8}$$

$$\boxed{5} + \text{1} = \text{6}$$

3D SHAPE


Can you name the real life 3D shapes? **Cube** **Cylinder** **Sphere** **Cone**



Cylinder



Sphere



Cube



Cone