






COUNTING - MATCH THE NUMBER

				
<p>11</p>	<p>10</p>	<p>8</p>	<p>9</p>	<p>7</p>

CALCULATING

Use the Numicon to work out the missing number in each question.

$$\begin{array}{|c|} \hline \text{○} \\ \hline \text{○} \\ \hline \end{array} + \square = \begin{array}{|c|} \hline \text{○} \\ \hline \text{○} \\ \hline \text{○} \\ \hline \end{array}$$

$$\begin{array}{|c|} \hline \text{○} \\ \hline \text{○} \\ \hline \text{○} \\ \hline \end{array} + \square = \begin{array}{|c|} \hline \text{○} \\ \hline \text{○} \\ \hline \text{○} \\ \hline \text{○} \\ \hline \end{array}$$

$$\begin{array}{|c|} \hline \text{○} \\ \hline \text{○} \\ \hline \text{○} \\ \hline \end{array} + \square = \begin{array}{|c|} \hline \text{○} \\ \hline \text{○} \\ \hline \text{○} \\ \hline \text{○} \\ \hline \end{array}$$

$$\square + \begin{array}{|c|} \hline \text{○} \\ \hline \end{array} = \begin{array}{|c|} \hline \text{○} \\ \hline \text{○} \\ \hline \text{○} \\ \hline \end{array}$$

3D SHAPE

Can you name the real life 3D shapes?

Cube

Cylinder

Sphere

Cone

