

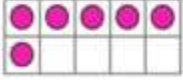


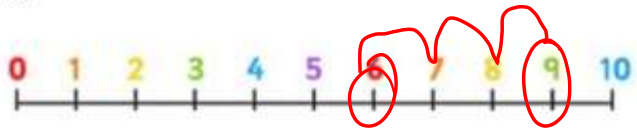


COUNTING				
				
How many?	How many?	How many?	How much?	How many?
14	14	6	10	14

CALCULATING

Use the number line to find the answer.

$$9 - 3 = \boxed{6}$$



$$\begin{array}{|c|} \hline \bullet \\ \bullet \\ \bullet \\ \bullet \\ \bullet \\ \hline \end{array} - \begin{array}{|c|} \hline \bullet \\ \bullet \\ \bullet \\ \hline \end{array} = \boxed{3}$$



$$\begin{array}{|c|} \hline \bullet \\ \bullet \\ \bullet \\ \bullet \\ \hline \end{array} - 1 = \boxed{4}$$



$$3 + \begin{array}{|c|} \hline \bullet \\ \bullet \\ \hline \end{array} = \boxed{5}$$



HALVES

Can you find the halves?



Half of 10 is...

$$\boxed{5}$$



Half of 4 is...

$$\boxed{2}$$



Half of 6 is...

$$\boxed{3}$$