

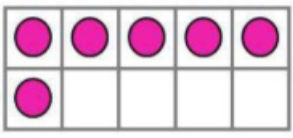




COUNTING

				
How many?	How many?	How many?	How much?	How many?

CALCULATING

Use the number line to find the answer.

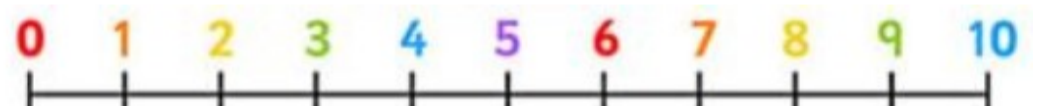
$$9 - 3 = \square$$



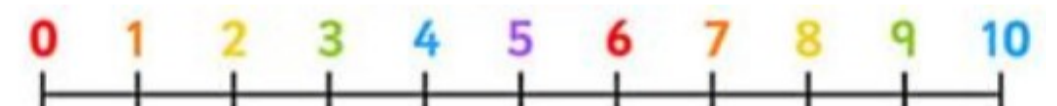
$$\begin{array}{|c|} \hline \bullet \\ \bullet \\ \bullet \\ \bullet \\ \bullet \\ \hline \end{array} - \begin{array}{|c|} \hline \bullet \\ \bullet \\ \bullet \\ \bullet \\ \hline \end{array} = \square$$



$$\begin{array}{|c|} \hline \bullet \\ \bullet \\ \bullet \\ \bullet \\ \hline \end{array} - 1 = \square$$

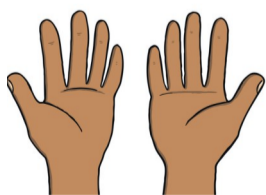


$$3 + \begin{array}{|c|} \hline \bullet \\ \bullet \\ \hline \end{array} = \square$$




HALVES

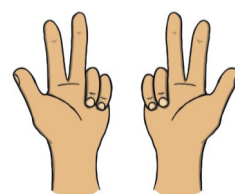
Can you find the halves?



Half of 10 is...



Half of 4 is...



Half of 6 is...