








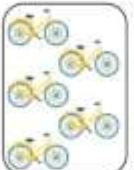





COUNTING				
				
How many triangles? 3	How many stars? 2	How many circles? 4	How many rectangles? 2	How many are red and green? 6

CALCULATING

Can you find the total amount? Please encourage your child to count backwards from the first amount to find the total. (E.g. count back from 6 for the first example to find the answer, '6' 5, 4, 3)

 -  = <input type="text" value="3"/>	 -  = <input type="text" value="4"/>
 -  = <input type="text" value="1"/>	 -  = <input type="text" value="7"/>

MISSING NUMBERS

Fill in the missing numbers

5	6	7	8	9
---	---	---	---	---

10	9	8	7	6
----	---	---	---	---

13	14	15	16	17
----	----	----	----	----

20	19	18	17	16
----	----	----	----	----