






COUNTING

				
How many? 8	How many? 10	How many? 9	How many? 6	How many? 3

CALCULATING

How much does each ice cream cost? Look at the coins and write the total amount in each circle.



5p



7p



20p



POSITIONAL LANGUAGE

Where is the puppy?

In the basket



Beside his food



In front of the grass

