






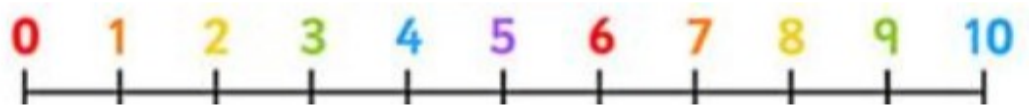
COUNTING

				
How many?	How many?	How many?	How much?	How many?

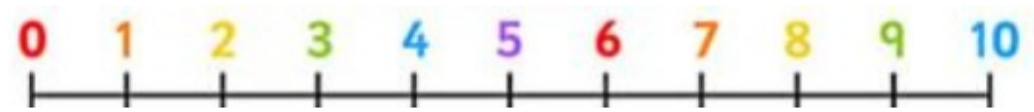
CALCULATING

Use the number line to find the answer.

$$10 - \begin{array}{|c|} \hline \bullet \\ \hline \bullet \bullet \\ \hline \bullet \bullet \bullet \\ \hline \end{array} = \square$$



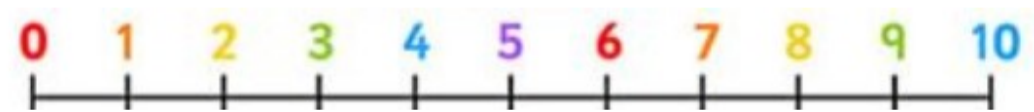
$$\begin{array}{|c|} \hline \bullet \\ \hline \bullet \bullet \\ \hline \bullet \bullet \bullet \\ \hline \bullet \bullet \bullet \bullet \\ \hline \end{array} - 3 = \square$$



$$\begin{array}{|c|} \hline \bullet \\ \hline \bullet \bullet \\ \hline \bullet \bullet \bullet \\ \hline \bullet \bullet \bullet \bullet \\ \hline \bullet \bullet \bullet \bullet \bullet \\ \hline \end{array} - 1 = \square$$

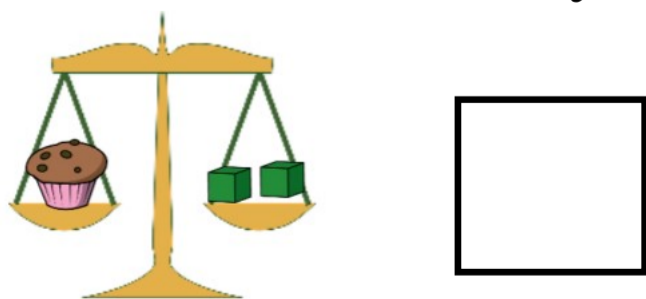


$$7 + \begin{array}{|c|} \hline \bullet \\ \hline \bullet \bullet \\ \hline \end{array} = \square$$

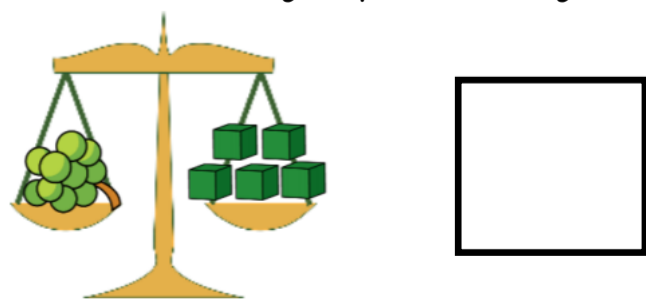


WEIGHT

How much does the cake weigh?



How much do the grapes weigh?



Which one is heavier? How did you know?