




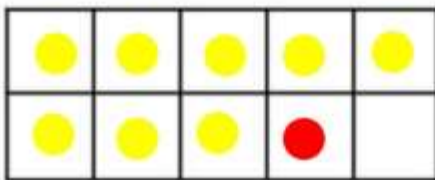


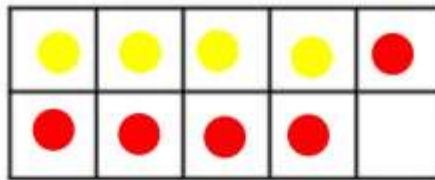
COUNTING				
				
How many?	How many?	How many?	How many?	How many?
5	16	17	16	0

CALCULATING

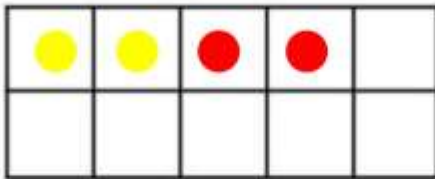
Use the tens frame to help you find the answers.



$$8 + 1 = \boxed{9}$$



$$4 + \boxed{5} = \boxed{9}$$



$$2 + 2 = \boxed{4}$$

ESTIMATION

Explain that this is an estimation game. Show each jar to your child for a few seconds encouraging them to make an estimation in the first box and then an actual count in the second box.



Estimation	Actual
<input type="text"/>	8



Estimation	Actual
<input type="text"/>	8