


COUNTING				
How many?	How many?	How many?	How many?	How many?
6	9	13	18	8

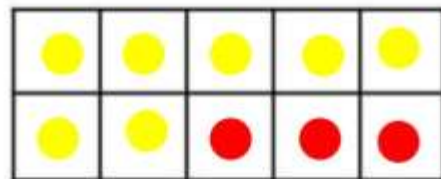
CALCULATING

Use the tens frames to help you find number bonds to 10. Can you think of another way of making 10 in the empty tens frame?

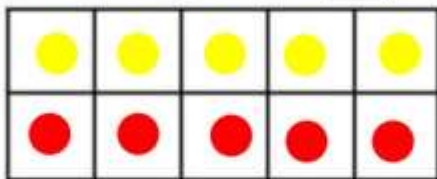
$$4 + 6 = 10$$



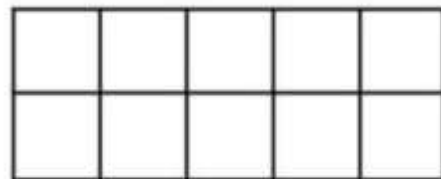
$$7 + 3 = 10$$



$$5 + 5 = 10$$



$$\square + \square = 10$$



One less than...

Can you find one less than these numbers?



One less than 14 is



One less than 16 is



One less than 4 is



One less than 7 is